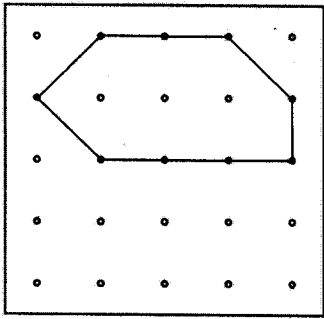


# GEOCLASS

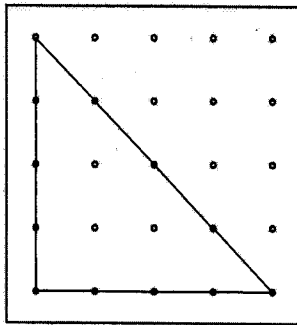
## Assignment 2

- Copy each shape on your geoboard.
- Copy again on your recording sheet.
- Find each angle that is LESS than a right angle, and mark with an X on your recording sheet.
- This is called an ACUTE angle.

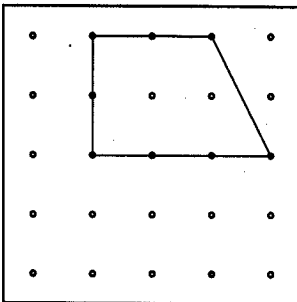
1.



2.




3.



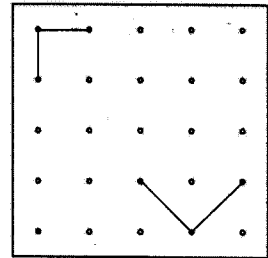
### 4. Bonus Problem

Try this challenge! Make a shape that has **three sides** with **one right angle** and **two acute angles**. First make it on your geoboard, and then on your recording sheet.

Check  
this  
out!



Right  
angles



Less than  
right  
angles  
(acute)

